



Name _____

Date: _____

Course: US History/Ms. Brown

Homeroom:



7th Grade US History
Standard # - Do Now - Day #66

Aims:

DO NOW

Directions:

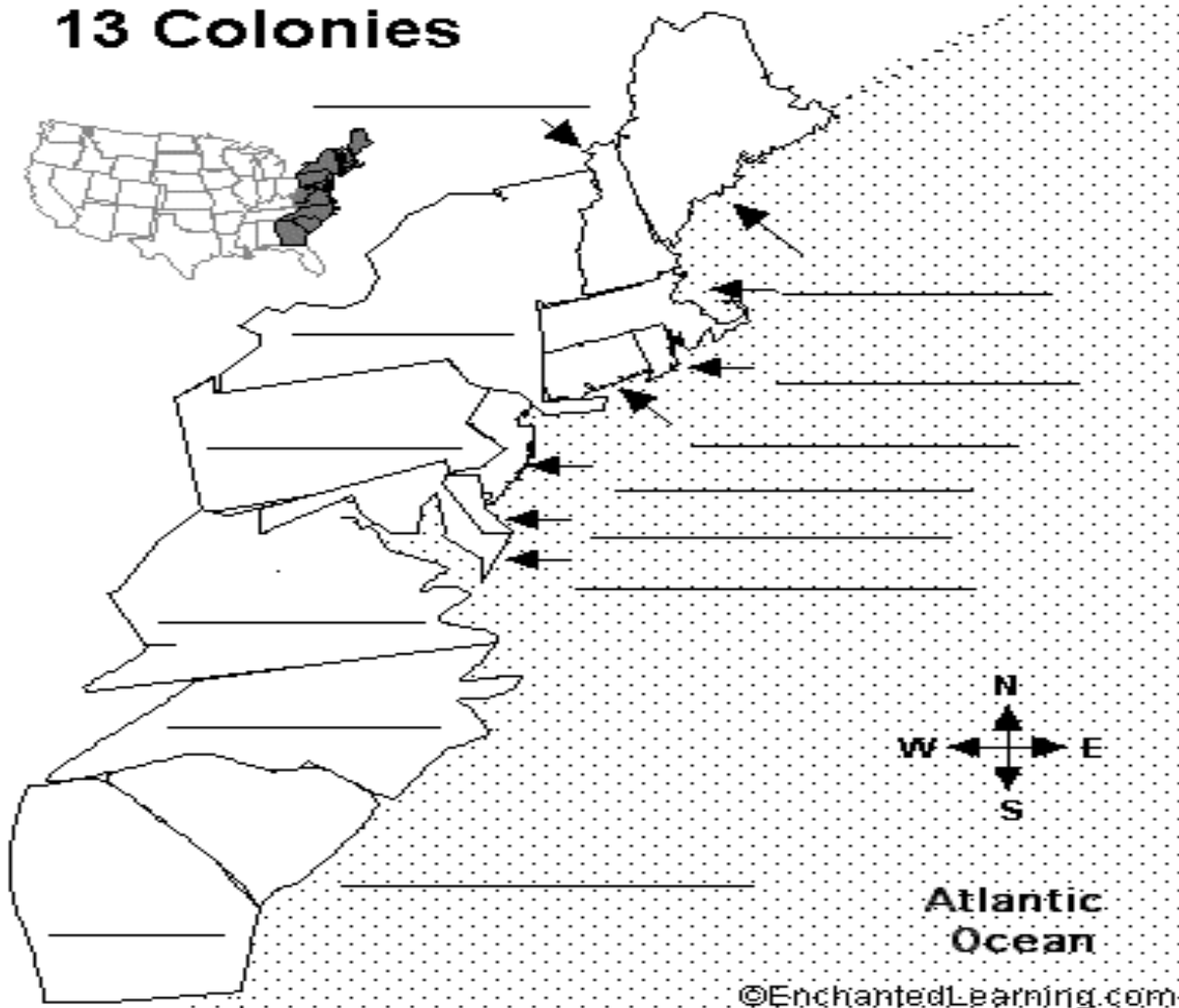
Locate and label the 13 colonies

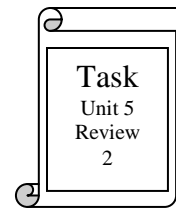
Locate and label the cities: Boston, New York, Philadelphia and Charleston

Locate and label the Appalachian Mountains

Score: ____/18 Mastered/Passing/Not Mastered

13 Colonies





Name _____ Date: _____ Homeroom: _____

Towards Independence

Directions: On your white board write the letter to the correct answer only, then write the correct answer in the corresponding box below.

Introduction and Before 1763	Early British Action	Townshend Acts & Boston Massacre	Boston Tea Party and Intolerable Acts	Lexington and Concord
Who were the Tories?	Why did Great Britain enact the Proclamation of 1763?	What did the Townshend Acts do?	What did the Tea Act of 1773 do?	King George III responded to the message from the First Continental Congress by
What was the conflict that led to the French and Indian War?	Why did Parliament pass the Stamp Act?	How did the colonists react to the Townshend Acts?	How did some Boston colonists react to the Tea Act?	Where was the first confrontation between the Minutemen and British troops?



Task
Unit 5
Review
2

Who were the two opponents fighting each other in the French and Indian War?	The colonists reacted so strongly to the Stamp Act because	What happened at the Boston Massacre?	How did the British Parliament react to the Boston Tea Party?	After the Battle of Concord's North Bridge, the British
What was the outcome of the French and Indian War?	**How did Parliament react when New York refused to enforce the Quartering Act?	**Why did John Adams defend the British soldiers at trial after the Boston Massacre?	What was the purpose of the First Continental Congress?	What did the colonists prove in the fighting of Lexington and Concord?





Name _____ Date: _____ Homeroom: _____

HOMework

_____/25 MASTERED/PASSING/NOT MASTERED

AMERICAN REVOLUTION TEST – STUDY GUIDE

Test Date: _____

1. Who won the French and Indian War?
2. How did the British plan to raise money to support its standing army in America?
3. Describe the life and achievements of Ben Franklin.
4. Explain the family metaphor that describes the relationship between the colonists and Britain.
5. What items did the Stamp Act tax?
6. What items did the Townshend Acts tax?
7. What protest slogan was popular throughout the colonies?
8. Define boycott.
9. Describe the events of the Boston Massacre.
10. Explain what happened during the Boston Tea Party.
11. Name the people involved on the evening of April 18, 1775. (HINT: Midnight Ride)
12. What did Ralph Waldo Emerson coin The Battle of Lexington?
13. Who wrote *Common Sense*?
14. How is Paul Revere's portrait of the Boston Massacre an example of propaganda?
15. Who was the king of England during the American Revolution?
16. Declaration of Independence (p. 193)
 - Date approved:
 - Primary author/writer of the document:
 - Documents which were used to plagiarized the Declaration:



17. From what country did the colonists declare their independence?

18. Name the *first* major battle of the Revolution

19. Battle of Bunker Hill

- Description:
- Groups involved:
- Importance:

20. Who was the most famous traitor in American history?

21. What role did women play in the War?

30. The Treaty of Paris (pg.212)

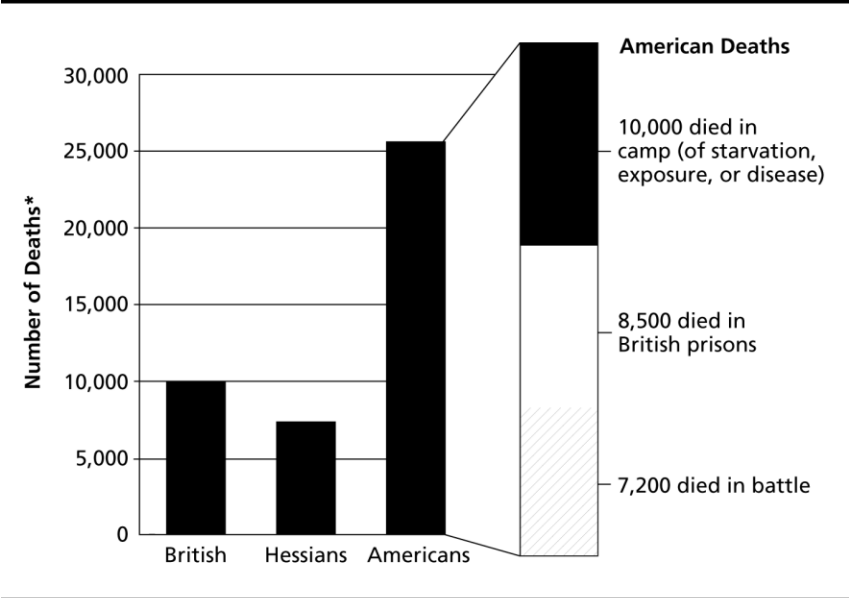
- Key Individuals:
- Terms of the Treaty:

- Importance:

31. – 45. Memorize this sentence from the Declaration of Independence: *We hold these truths to be self-evident that all men are created equal, that they are endowed by their Creator with certain unalienable Rights that among these are Life, Liberty, and the pursuit of Happiness.*

32. How is the quote above a contradiction?

Military Deaths in the American Revolution



*These figures are estimates. No figures available for French deaths.

Sources: *World Book Encyclopedia; An Outline History of the American Revolution*

46. Which group suffered about 10,000 deaths in the war?
47. How many Americans died in British prisons?
48. Approximately how many Hessians died in the war?
49. What do the numbers along the left side of the graph indicate?
50. Which group suffered the most deaths overall?