



Name _____

Date: _____

Course: US History/Ms. Brown

Homeroom:



7th Grade US History
Standard #7H111 – Do Now – Day #11

Aims: SWBAT locate and label the 5 NYC boroughs and surrounding rivers, bridges and oceans
SWBAT locate and label 2 states that border New York

DO NOW

1	2	3	4
---	---	---	---

1

FOUR INCH RULER

ONE INCH RULER

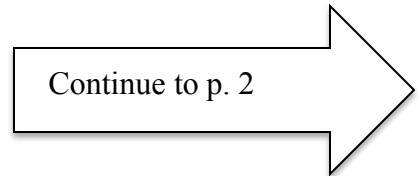


Map of Travel Chess Set

Travel Chess Set

Both the travel chess set and the map of the travel chess set are squares

1. How wide is the map of the travel chess set? _____





2. How wide is the travel chess set? _____
3. What is the scale of the map of the travel chess set? (the ratio) _____
4. If you measure the distance between Democracy Prep Harlem and Coney Island on the map and the distance was 11 inches on the map, the distance in the real world would be _____ miles (1 inch = 2 miles)



Name _____

Date: _____

Homeroom: _____

Daily Debrief

Dear Brainiacs,

We live in one of the most diverse cities in the world! With a skyline that is recognizable worldwide and more than 8.3 million people from all corners of the globe who call it home, New York City is a one-of-a-kind city. Today we will learn more about our city is broken up and how to navigate our great city.

I. The Five Boroughs

New York City is divided between _____. A borough is a political region of New York City. These regions (boroughs) include: _____, _____, _____, _____, and _____.





Name _____

Date: _____

Homeroom: _____

II. All Aboard the New York City Borough Tour!

Stop 1. The Bronx (BX)

Population: _____ people

Claim to Fame: The _____ ,

and New York _____

The Bronx is located _____
from Manhattan and is the _____
most borough in New York City

Land Area: _____ miles

County: _____ County



Stop 2. Brooklyn (BK)

Population: _____
people

Claim to Fame: The _____
_____ , _____

Brooklyn is located _____
from Manhattan across the East River

Land Area: _____ miles

County: _____ County



Stop 3. Manhattan (MN)

Population: _____
people

Claim to Fame: _____ ,
_____ , _____

Manhattan is _____ of the Bronx, _____
of Brooklyn and Queens, and _____ of
Staten Island.

Land Area: _____ miles

County: _____ County





Name _____

Date: _____

Homeroom: _____

Stop 4. Queens (QN)

Population: _____

people

Claim to Fame: _____,

_____ ,

_____ & _____

Queens is the _____ most borough in New York City. Queens is surrounded by water on _____ sides. The East River to the _____, the Long Island Sound to the _____ and the Atlantic Ocean to the _____ and _____.

Land Area: _____ miles

County: _____ County

Stop 5. Staten Island (SI)

Population: _____ people

Claim to Fame: _____

_____ ,

Staten Island is the _____ most and _____ most borough closest to New Jersey. Staten Island is surrounded by water on _____ sides by the _____ Ocean.

Land Area: _____ miles

County: _____ County



Directions: Work with your shoulder partner to complete the chart below using the class notes

Borough	County	Population	Land Area



Name _____ Date: _____ Homeroom: _____

Chart Analysis

1. List the New York City Boroughs from Least to Greatest Population

_____, _____, _____, _____ and _____

2. List the five New York City Boroughs from Greatest to Least Land Area

_____, _____, _____, _____ and _____

Getting Around New York City

New York City Bridge and Tunnel Crossings Map



1. _____ Bridge
2. Third Avenue Bridge
3. Willis Avenue Bridge
4. _____ Bridge
5. _____ Bridge
6. _____ Tunnel
7. _____ Tunnel
8. _____ Bridge
9. _____ Tunnel
10. _____ Bridge
11. _____ Bridge
12. _____ Tunnel



Name _____

Date: _____

Homeroom: _____

Map Analysis

Directions: Use the map above to answer the following questions. Please write in complete sentences.

1. According to the map, how many bridges connect Manhattan and the Bronx? _____

2. Which bridges connect Manhattan and the Bronx? _____

3. According to the map how many bridges connect Manhattan and Queens? _____

4. Which bridges connect Manhattan and Queens? _____

5. According to the map, how many bridges connect Manhattan and Brooklyn? _____

6. Which bridges connect Manhattan and Brooklyn? _____

7. According to the map, how many bridges connect Manhattan and Staten Island? _____

8. Which bridges connect Manhattan and Staten Island? _____

9. According to the map, how many bridges connect Manhattan and New Jersey? _____

10. Which bridge(s) connect Manhattan and New Jersey? _____

11. How many tunnels connect Manhattan to the outer boroughs? _____



Name _____ Date: _____ Homeroom: _____

12. Which tunnels are connected to Manhattan from the outer boroughs?

- The _____ connects _____ to Manhattan
- _____ connects _____ to Manhattan

13. How many tunnels connect Manhattan and New Jersey? _____

14. The _____ and _____ connects _____ to Manhattan

15. According to the map, how many bridges connect the outer boroughs to Manhattan?

16. According to the map how many bridges AND tunnels connect Manhattan and New Jersey?

17. Which river divides the Bronx and Manhattan? _____

18. Which river divides Manhattan from Queens and Brooklyn? _____

19. Which river divides Manhattan from New Jersey? _____

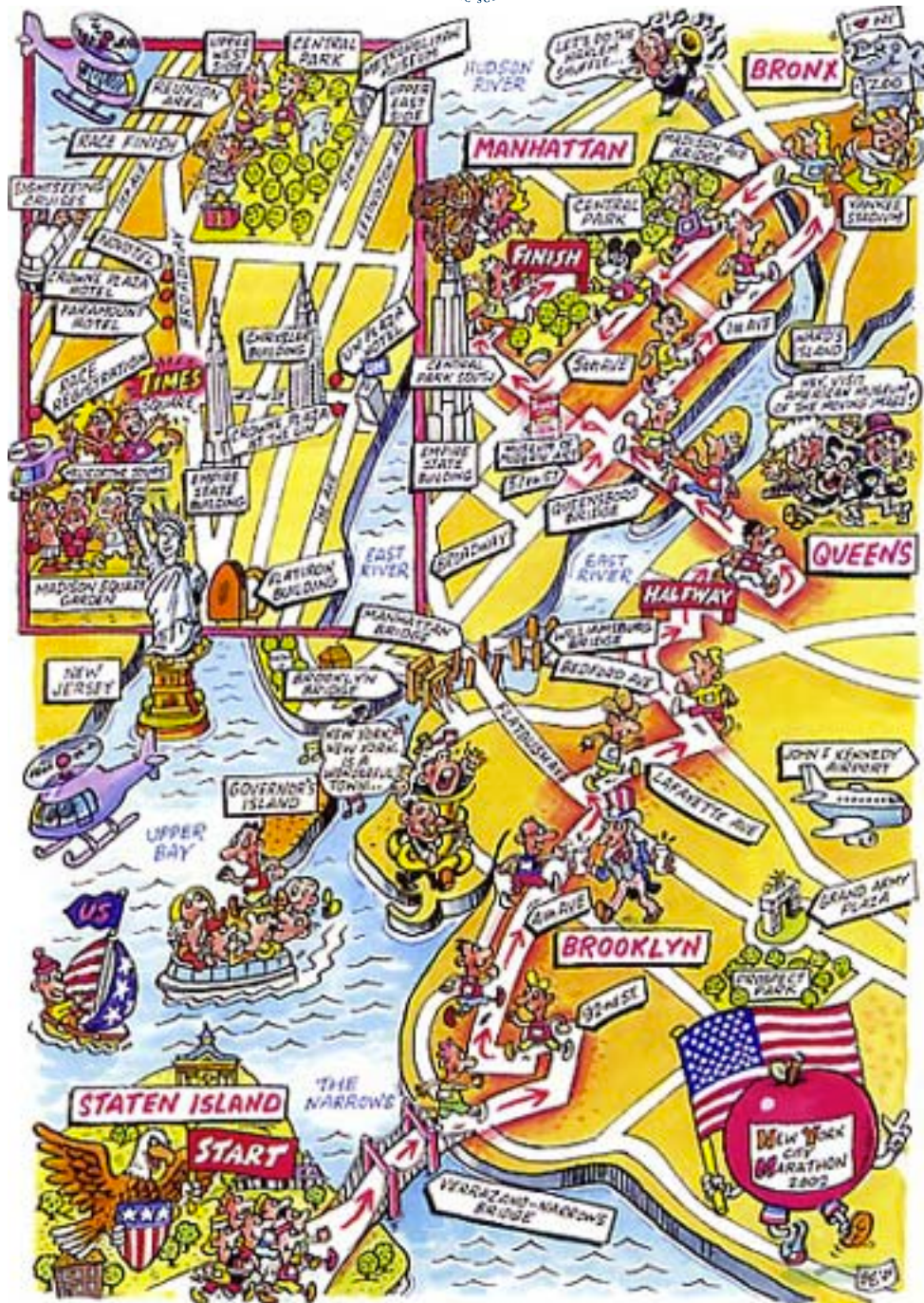


/c\
\Name _____ Date: _____ Homeroom: _____

HOMEWORK

_____/10 Mastered/Passing/Not Mastered

Directions: The New York City Marathon is a 26.2 mile run through all five city boroughs. Use the New York City Marathon map below to answer the following questions in complete sentences.



Name _____ Date: _____ Homeroom: _____

1. Which borough does the New York City Marathon begin in? _____



2. Which bridge do the runners cross to get to the second borough of the race? _____

3. What is the second borough of the New York City Marathon race? _____

4. The half-way point of the race is located adjacent (next to) which River? _____

5. At the half-way point the runners cross the _____
_____ and enter the borough of _____.
6. The racers travel _____ into the final borough of the race: _____
by crossing the _____ river and then circle back to finish the race in the borough
of _____.

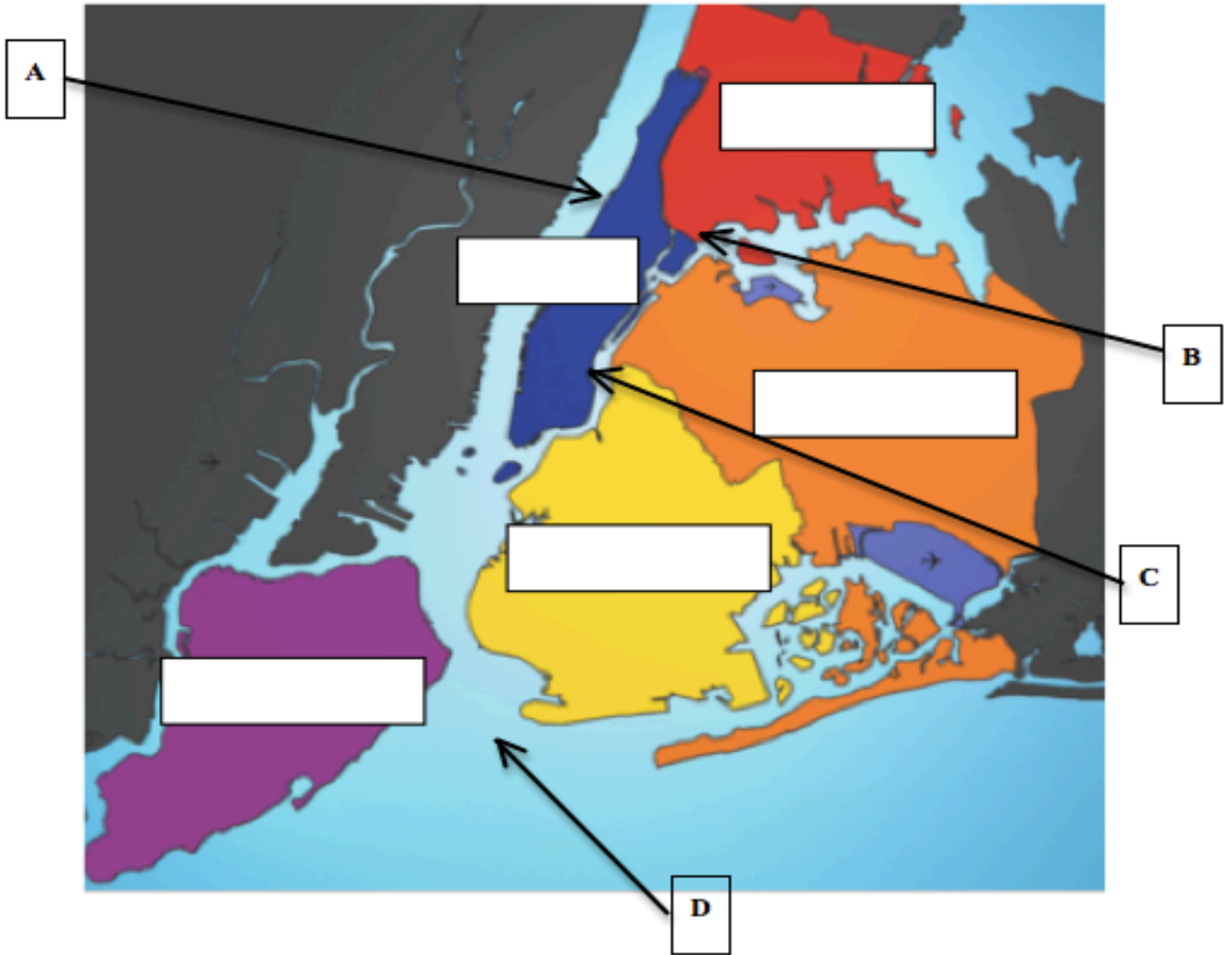
Name _____ Date: _____ Homeroom: _____

EXIT TICKET

_____/5 Mastered/Passing/Not Mastered



Directions: Label each of the boroughs and the bodies of water that surround New York City (rivers and oceans). Use the boxes to label the boroughs and the letters for the bodies of water.



A. _____

B. _____

C. _____

D. _____